
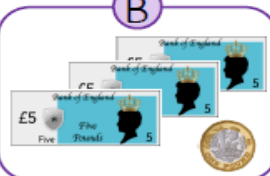



Below are a variety of maths questions which your child should be able to do. They may need support to read some of the questions. They also need to label the time on the clock in the middle please.


Just to clarify comparison signs they will need for questions 2 and 3 are:  $>$  greater than       $<$  less than       $=$  equals

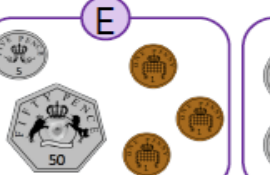
**1** Match the same amounts.

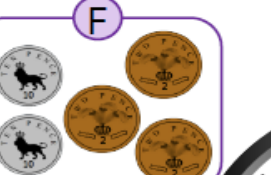
A 

B 




C 

D 



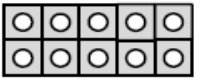
E 

F 

**2** Add comparison symbols.

---

**3** Use the number track to compare the two numbers.

36	37	38	39	40	41	42	43	44	45
----	----	----	----	----	----	----	----	----	----

37 is more / less than 41

41 is more / less than 37

37  41

41  37



**4**

$27 + 61 =$

---

Thirty-five add nine ones and 3 tens =