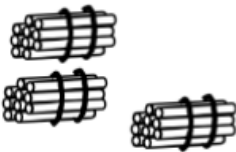



Year 2 Homework—

Below are a variety of maths questions which your child should be able to do. They may need support to read some of the questions. They also need to label the time on the clock in the middle please.

1

What number is represented?

Tens	Ones
	

2

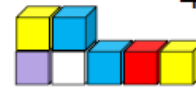
Complete the sentences.

Tia has 8 blocks.



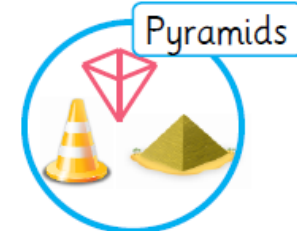
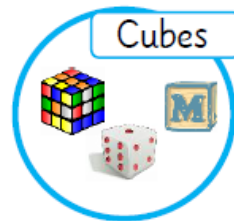
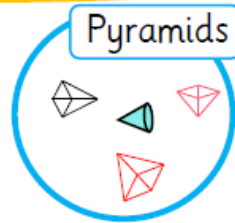
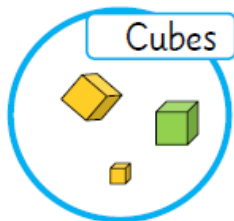
She puts on 7 more.
How many blocks does Tia have now?

4 blocks are added but 3 fall down.
How many are left?



3

Have the shapes been sorted correctly?



4

Calculate.

= 2 + 3

= three add nine